

Name: \_\_\_\_\_

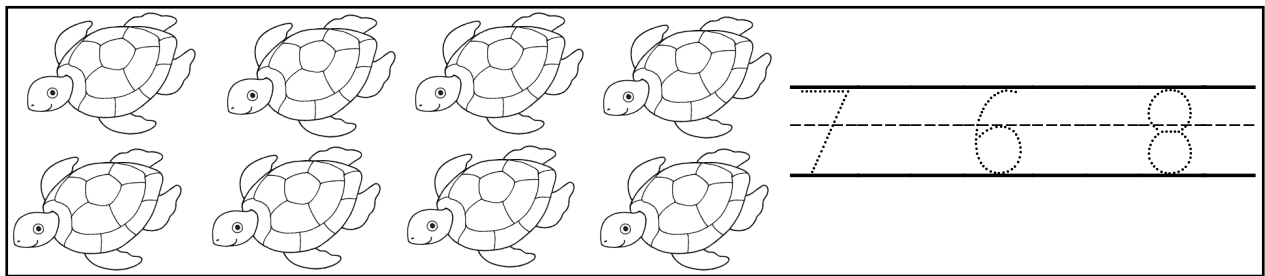
Week of 8 April 2024

### Math Homework


#### Review Numbers 6, 7, 8, 9

#### Instructions:

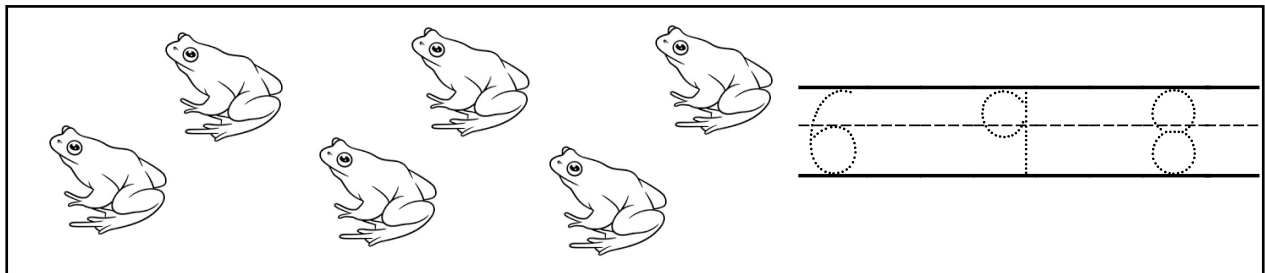
1. **Count** the quantity of animals in each set and **trace** its corresponding numeral.
2. **Color** the animals.



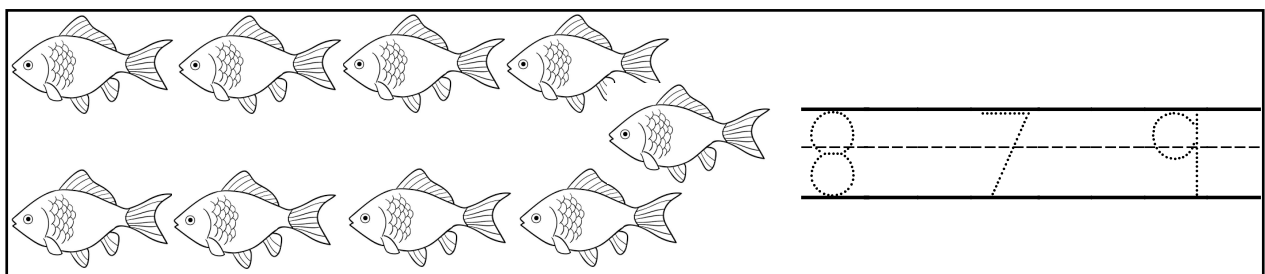
A rectangular box containing two rows of four turtles each. To the right of the turtles is a set of three horizontal lines (top, middle-dashed, bottom) with the numbers 7, 6, and 8 drawn in a dotted style for tracing.



A rectangular box containing two rows of rabbits. The top row has four rabbits and the bottom row has three rabbits. To the right is a set of three horizontal lines with the numbers 6, 7, and 9 drawn in a dotted style for tracing.

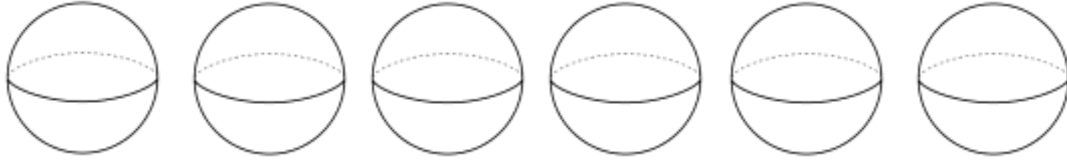


A rectangular box containing two rows of frogs. The top row has three frogs and the bottom row has three frogs. To the right is a set of three horizontal lines with the numbers 6, 9, and 8 drawn in a dotted style for tracing.

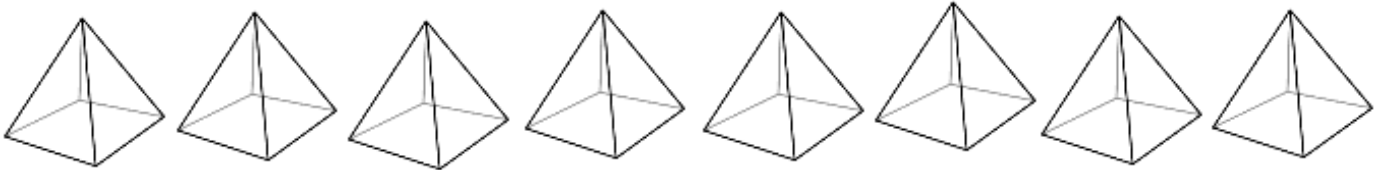


A rectangular box containing two rows of fish. The top row has four fish and the bottom row has four fish. To the right is a set of three horizontal lines with the numbers 8, 7, and 9 drawn in a dotted style for tracing.

3. Using a **brown** crayon or colored pencil, **color** 6 spheres.



4. Using a **red** crayon or colored pencil, **color** 7 pyramids.



5. Using a **yellow** crayon or colored pencil, **color** the lemons that contain a number **8** or number **9**.

